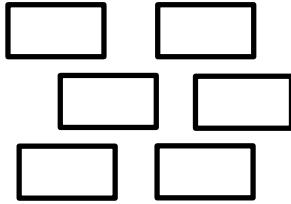


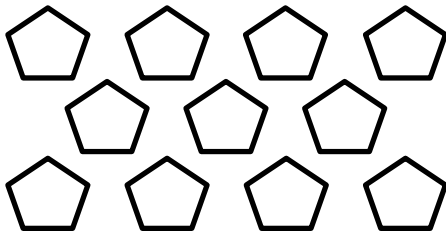
Name _____

Date _____


1. Pair the objects to decide if the number of objects is even.



Even/Not Even




Even/Not Even



Even/Not Even

2. Draw to continue the pattern of the pairs in the spaces below until you have drawn zero pairs.



3. Write the number of hearts in each array in Problem 2 in order from greatest to least.
4. Circle the array in Problem 2 that has 2 columns of 6.
5. Box the array in Problem 2 that has 2 columns of 8.
6. Redraw the set of stars as columns of two or 2 equal rows.



There are _____ stars.
 Is _____ an even number? _____

7. Circle groups of two. Count by twos to see if the number of objects is even.

a. There are _____ twos. There are _____ left over.

b. Count by twos to find the total.
 _____ / _____ / _____ / _____ / _____ / _____ / _____ / _____

c. This group has an even number of objects: True or False.